






CHAPTER 4: OPERATION


Fruit Frenzy - 1


A.  +  = 8


B.  + 3 = 8


C.  +  +  = 10

D.  - 2 = 

 = _____

 = _____

 = _____




 = _____

CHAPTER 4: OPERATION


Fruit Frenzy - 2

A.  +  = 10

B.  +  +  = 9

C.  +  = 

 = _____

 = _____




 = _____


CHAPTER 4: OPERATION


Fruit Frenzy - 3

A.  +  = 3

B.  +  + 4 = 10

C.  +  +  = 7

 = _____

 = _____

 = _____




CHAPTER 4: OPERATION


Fruit Frenzy - 4


A.  +  = 10

B.  -  = 3

C.  +  = 7

D.  -  -  = ?



 = _____

 = _____

 = _____




CHAPTER 4: OPERATION


Fruit Frenzy - 5

A.  +  = 9


B.  +  = 5

C.  +  = 4

D.  -  +  = ?

 = _____

 = _____



 = _____




CHAPTER 4: OPERATION


Fruit Frenzy - 6

A.  -  = 6

B.  -  = 8

C.  -  = 2

D.  +  +  = ?

 = _____

 = _____

 = _____