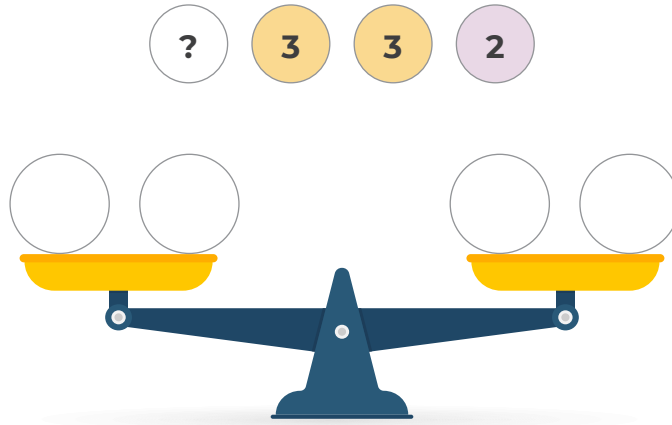


## CHAPTER 4: OPERATION

### Balance - 1

Fill in the circles to balance the scale.

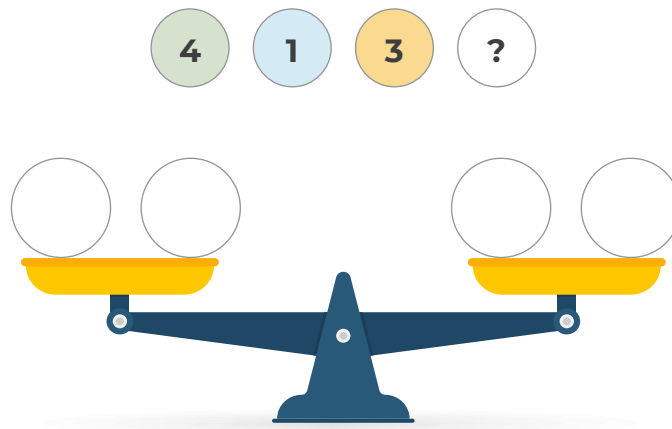


How do you know? | Is there another way to balance it?

## CHAPTER 4: OPERATION

### Balance - 2

Fill in the circles to balance the scale.

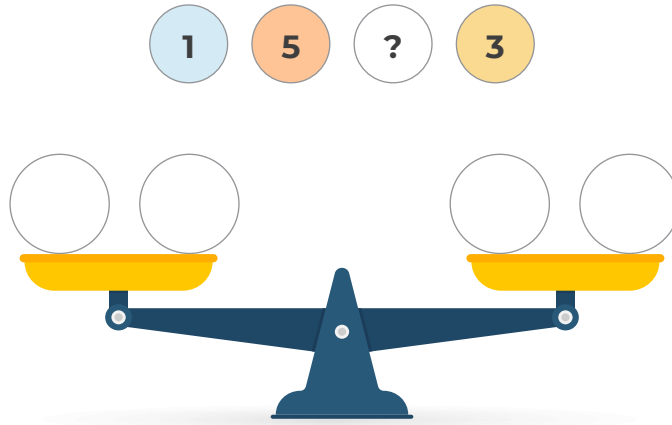


How do you know? | Is there another way to balance it?

## CHAPTER 4: OPERATION

### Balance - 3

Fill in the circles to balance the scale.

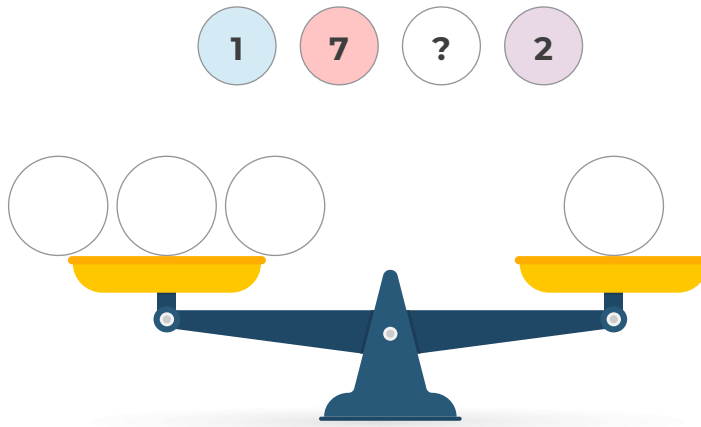


How do you know? | Is there another way to balance it?

## CHAPTER 4: OPERATION

### Balance - 4

Fill in the circles to balance the scale.

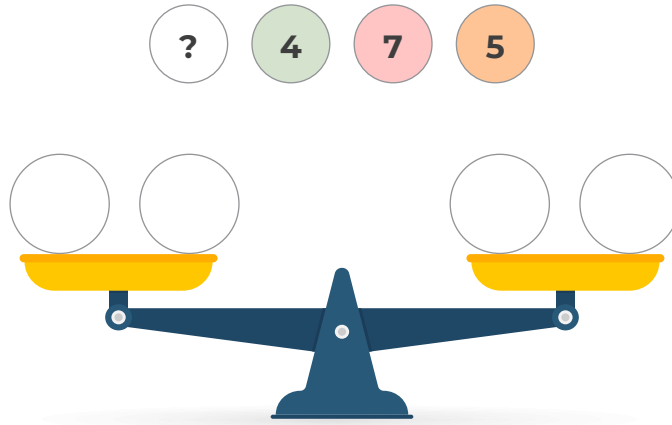


How do you know? | Is there another way to balance it?

## CHAPTER 4: OPERATION

### Balance - 5

Fill in the circles to balance the scale.

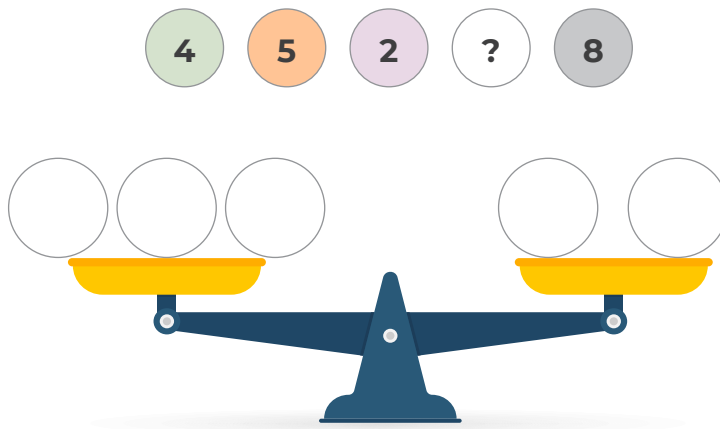


How do you know? | Is there another way to balance it?

## CHAPTER 4: OPERATION

### Balance - 6

Fill in the circles to balance the scale.



How do you know? | Is there another way to balance it?